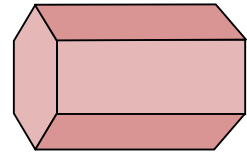


Worksheet 2-1: Everyday 3-D Solids


1. What is the name of this 3D shape?



2. If a triangular prism is a solid shape with a cross section that is a triangle, what would a solid shape with an octagon cross section be called?



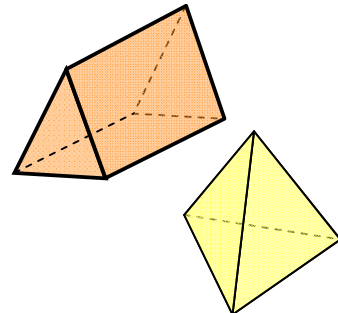
3. Give an example of an everyday object that could be described as a sphere.







4. What is the name of this everyday 3D object?



5. How does a triangular-based pyramid differ from a triangular prism?



3D Shapes In Our Environment

<p>sphere</p> 	<p>cone</p> 
<p>3D object</p> <p>cylinder</p> 	<p>cube</p> 

			
			
<p>3D object</p> 			